

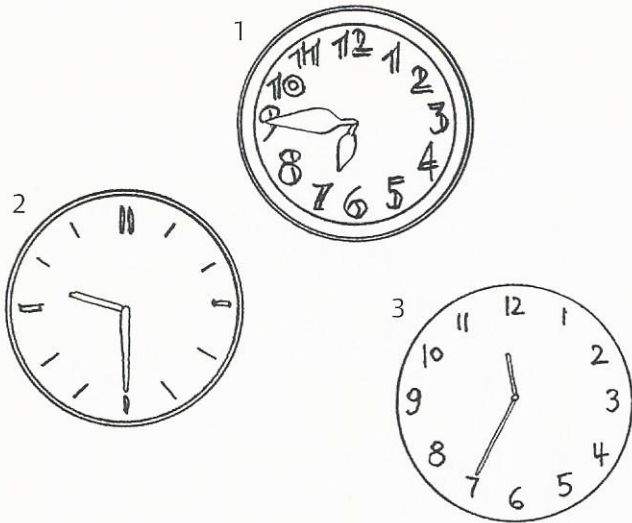
2 WORDS What time is it?

/9

Look at the clocks.

a) Match the clocks with the sentences. There are three more sentences than you need.

/3



It's twenty-five past eleven.

It's quarter to seven.

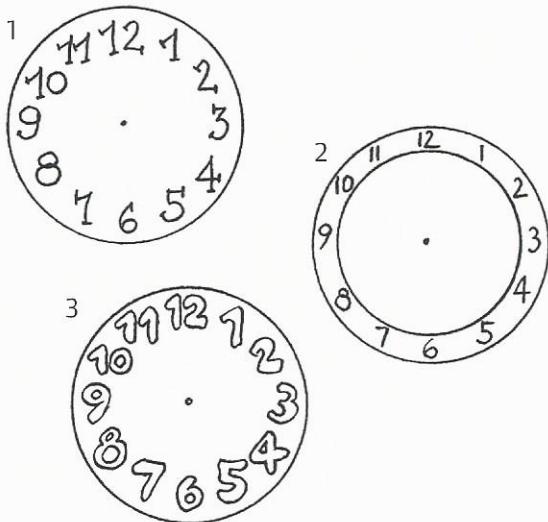
It's half past ten.

It's twenty-five to twelve.

It's half past nine.

b) Draw the times on the clocks.

/3



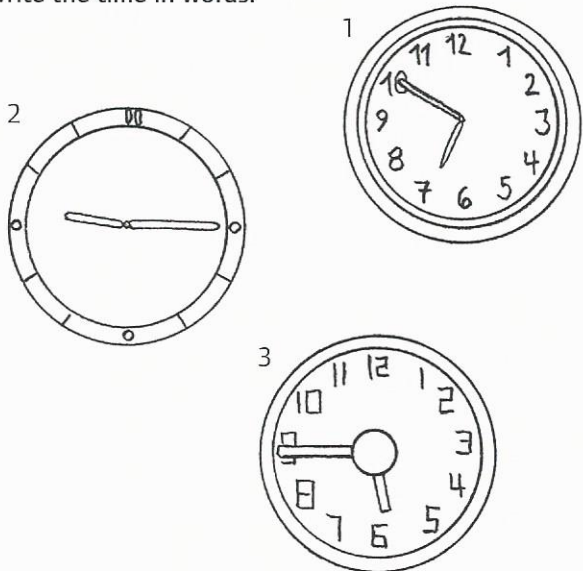
It's twenty past four.

It's five to twelve.

It's half past one.

c) Write the time in words.

/3




---



---



---